

SUMMER HOLIDAY ASSIGNMENT	
CLASS - V	
SUBJECT	ASSIGNMENT
ENGLISH I	<ol style="list-style-type: none"> Read Ch. 1 and 2, write hard words from the chapters with their meaning (do the work in English I note book) Make a sentence with given words in the English I note book <ol style="list-style-type: none"> We All My Together Welcome Allow Happy Earth Precious Excitement Box Curious Because Loud Going Draw a poster on 'Save Our Earth' on A4 size sheet and decorate it.
ENGLISH II	<ol style="list-style-type: none"> Learn Ch. 1 and write any 10 sentences and mention subject and predicate in sentences. Write a paragraph in the notebook on the following topics. <ol style="list-style-type: none"> Myself My first visit to Zoo.
HINDI I	<ol style="list-style-type: none"> हिंदी सुलेख पुस्तिका के पेज न. 15 से 30 तक करे। हिंदी पुस्तिका 'नवरंग' के पेज न. 114 पर दिए गए 'स्थानांतरण हेतु' पत्र हिंदी 2 की कॉपी में करे। हिंदी पुस्तिका 'नवरंग' के पेपर न. 129, 130 पुस्तक में करे। पेज न. 48 पर दिए गए रोचक क्रिया कलाप— राजस्थान की प्रसिद्ध इमारतों के चित्र एकत्रित कर हिंदी 1 की कॉपी में चिपकाइए। करवाएँ गए पाठ्यक्रम को याद करे।
MATHS	<ol style="list-style-type: none"> Learn and write table 2 to 20. CH-1 large numbers, Do Revision Exercise Page no. 23 Q1 to Q5. Subject Integration on page no. 23 Ch-1 large numbers (worksheet 1) <ol style="list-style-type: none"> Page no. 4 Q1 to Q14 Page no. 5 complete the work. Do the given worksheet in Maths HW note book.
SCIENCE	<ol style="list-style-type: none"> Collect 5 seeds (monocal & Dicat) put it in a polybag, (small) then paste it on A-4 drawing sheet. Germinate a gram seed and observe it for 10 days. Write your observation in the science note book. Prepare a Vaccination chart in your Science notebook. Mention the numbers of vaccines you had till now (Table) Prepare your diet chart on what you eat daily according to a balanced diet (carbohydrates, Vitamins, Proteins, Fats, Minerals, Roughage, and Water. Prepare your daily time table for Vacations including these:- Exercise, breakfast, lunch, dinner sturdy, playing, sleeping. Read ch-1 and ch-2 then learn copy work. Also this learn the bookwork.

SOCIAL SCIENCE	<ol style="list-style-type: none"> 1. Draw a map of your house. Use suitable symbols and signs to indicate the position of various objects and places. Also prepare a key for the map. 2. On the Indian political map, mark the Union Territories and the neighboring countries of India. 3. Mark the physical features of India in a political map. 4. Write an article, suggesting ways to stop deforestation. Use photographs, old newspaper cuttings etc. to support your findings. 5. Find out the maximum and minimum temperature of your city during the last one week (7 days). 6. Find out the countries through which the equator passes.
GK	<p>Instruction:- All work has to be done on A4 sheet.</p> <p>Q1. Collect any 5 cash crop put them in polybag and paste it on the sheet. Name them and write 1-2 lines about them.</p> <p>Q2. Paste the picture of the following and write their inventors name:- 1. Mobile phone 2. Automobile 3. Thermometer 4. Electric Generator 5. Light Bulb</p> <p>Q3. Paste a picture of a cricket legend of your choice. Write about him/her in not more than 100-150 words.</p> <p>Q4. Write 10 current affairs of the year 2023.</p> <p>Q5. Write any 2 News headlines every day from an English newspaper.</p>
COMPUTER	1. Periodic Assessment 1 on Pg. no. 29 Q a, b and c do it in copy.
MAB	<ul style="list-style-type: none"> • Do the given worksheet.
VED.	<p>Project work-</p> <ul style="list-style-type: none"> • Make a separate folder & attach the sheets • Read a story book. Write the story in your own words. Design the sheets & make it presentable.

Maths

1. (a) The place value of 6 in the number 69,12,457 is $6 \times$ _____ = _____.
(b) The place value of 4 in the number 69,12,456 is $4 \times$ _____ = _____.
2. Write the numeral for each of the following.
(a) Thirty-four lakh twenty-six thousand nine hundred and nine _____
(b) Nine crore forty-seven lakh six hundred and twenty _____
3. Find the sum and difference of the place values of the **bold** digits for the given number—
7**6**85438
4. Mark the periods with commas in the following number and write the name in both the indian and international systems of numeration.
508965
(a) Indian system _____
(b) International system _____
5. Write the expanded form of the following number—
4312354
6. Observe and complete the following patterns.
(a) _____, 87, 28, 604, 87, 28, 605, _____
(b) _____, 33, 30, 817, 33, 30, 818, _____
7. Choose the correct symbol (>, <, or =) and fill in the blanks.
(a) 23,345 _____ 22,435 (b) 3,45,236 _____ 3,45,236
8. Form the greatest and smallest numbers using the given digits only once.
2, 8, 6, 0, 9, and 5
9. Round the given number to the nearest 100 and 1,000.
64,560
Nearest 100 _____
Nearest 1,000 _____
10. Fill in the blanks using Roman numerals.
(a) India got independence in the year _____.
(b) Mahatma Gandhi passed away in the year _____.

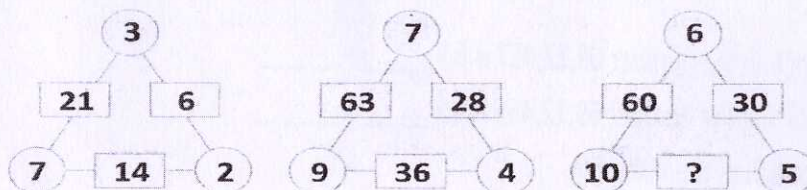
MAB

1. Identify the correct symbols which replace the '?' and make the statement true.

$$6 \text{ (?) } 2 = 9 \text{ (?) } 3$$

- (a) -, - (b) +, + (c) +, × (d) ×, +

2. Find the number in place of '?'.



- (a) 40 (b) 60 (c) 50 (d) 70

3. Find the term in place of '?'.

Z1	Y2	X3	W4	?
----	----	----	----	---

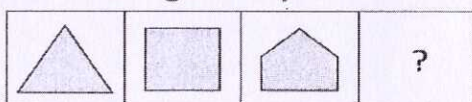
- (a) K11 (b) U6 (c) V5 (d) M5

4. Find the term in place of '?'.

A26	B25	C24	D23	?
-----	-----	-----	-----	---

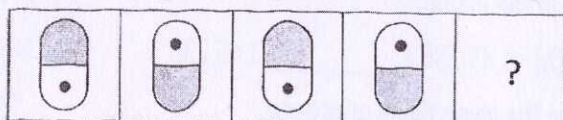
- (a) E22 (b) F23 (c) G24 (d) H25

5. Find the figure in place of '?'.



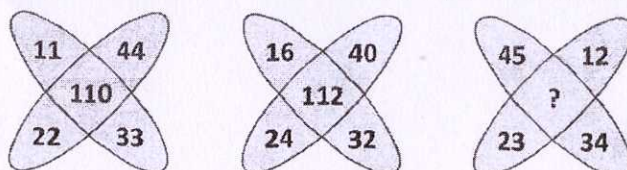
- (a) (b) (c) (d)

6. Find the figure in place of '?'.



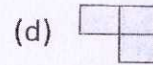
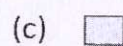

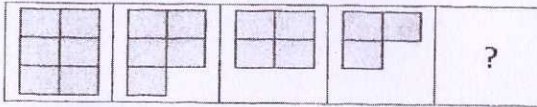
- (a) (b) (c) (d)

7. Replace the question mark i.e., '?' with the appropriate number.



- (a) 114 (b) 116 (c) 118 (d) 120

8. Find the figure in place of '?'.



9. Peter baked 3 cakes on Monday, 5 cakes on Tuesday, 7 cakes on Wednesday and 9 cakes on Thursday. How many cakes will he bake on Saturday?

(a) 11

(b) 13

(c) 15

(d) 17

10. Mary read 7 novels in January, 10 novels in February, 13 novels in March and 16 novels in April. How many novels will she be able to read in May?

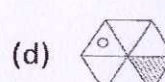
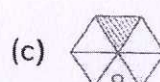
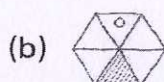
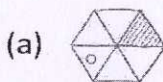
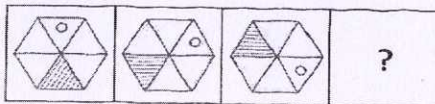
(a) 19

(b) 20

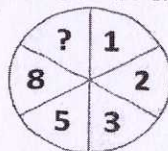
(c) 17

(d) 18

11. Find the figure in place of '?'.



12. Find the missing number out of the given alternatives.



(a) 10

(b) 12

(c) 13

(d) 15

Direction Q. No. (26-30): Find the number/alphabet in place of '?' in the following.

13.

1	4	?
4	2	5
2	2	3
7	8	13

(a) 3

(b) 4

(c) 5

(d) 6

14.

6	6	8
5	7	5
4	3	?
120	126	320

(a) 4

(b) 8

(c) 12

(d) 16